


## Maths Challenge

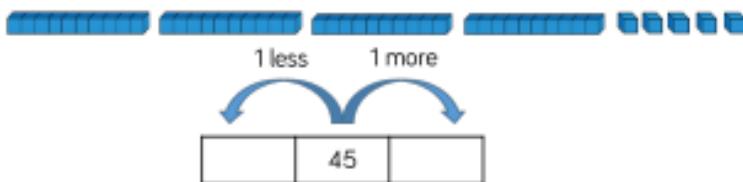
Fill in the blanks:



There are \_\_\_ donuts.

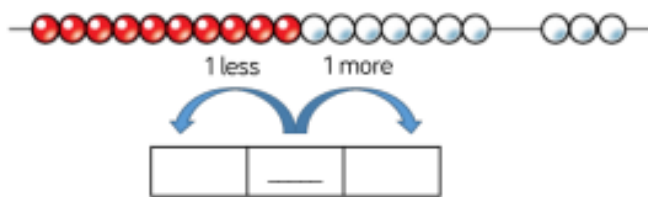
One more than \_\_\_ is \_\_\_

Build and find one more and one less.



One more than \_\_\_ is \_\_\_


One less than \_\_\_ is \_\_\_



One more than \_\_\_ is \_\_\_

One less than \_\_\_ is \_\_\_

Find one more and one less:



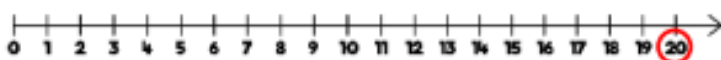
One more than \_\_\_ is \_\_\_

One less than \_\_\_ is \_\_\_

1	2	3	4	5	6	7	8	9	10
11	12	13	14	15	16	17	18	19	20
21	22	23	24	25	26	27	28	29	30
31	32	33	34	35	36	37	38	39	40
41	42	43	44	45	46	47	48	49	50

One more than \_\_\_ is \_\_\_

One less than \_\_\_ is \_\_\_



One more than \_\_\_ is \_\_\_

One less than \_\_\_ is \_\_\_