

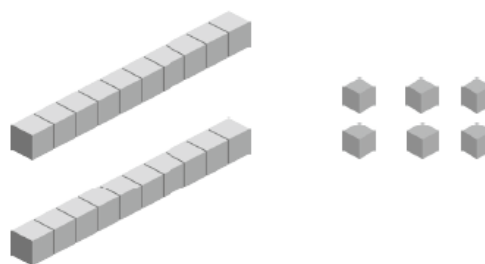

Name: _____ Class: _____ Date: _____

Worksheet 4

Comparing Numbers

- 1** Count and compare.
Write the missing numbers.

(a)



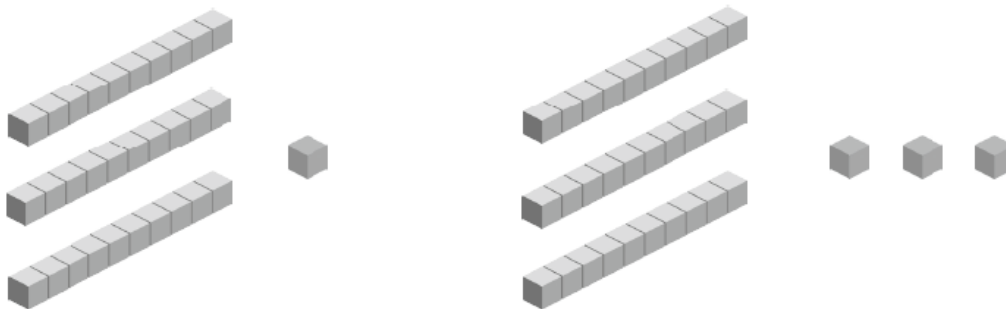
$$14 = \square \text{ ten } \square \text{ ones}$$

$$26 = \square \text{ tens } \square \text{ ones}$$

is more than .

is less than .

(b)



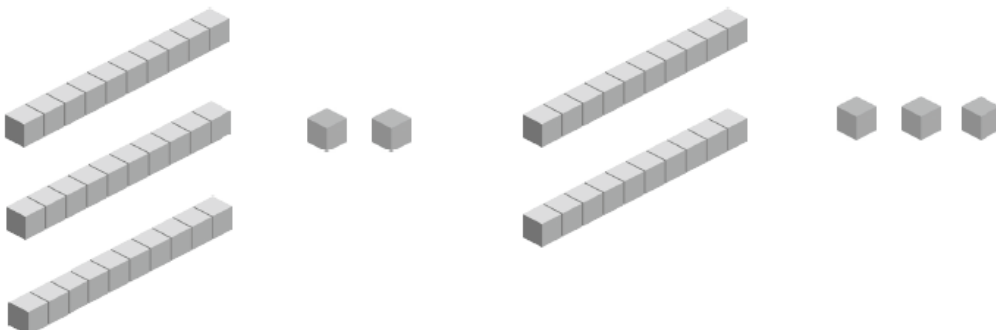
31 = tens ones

33 = tens ones

is more than .

is less than .

(c)



= tens ones

= tens ones

is more than .

is less than .

2 Compare and write the missing numbers.

(a)

35

37

25

is the smallest.

is the greatest.

Arrange the numbers in order.
Start with the smallest.

, ,

(b)

40

21

34

is the smallest.

is the greatest.

Arrange the numbers in order.
Start with the greatest.

, ,

3 Colour the box with the smaller number.

Write the matching letter in the boxes below and then complete the message at the bottom.

32	23
O	M

35	39
A	P

20	40
T	R

31	29
E	H

25	34
S	U

30	27
P	I

22	33
S	O

38	28
B	F

21	26
U	I

35	28
A	N

M _ _ _ _ _ !