

# Maths Lesson

8.1.21

## Guided Practice

1 Which is less, 18 or 10?

2 Compare 11, 19 and 13.

(a) The greatest number is .

(b) Arrange the numbers in order.  
Start with the smallest.

,

,

3 Arrange 9, 19 and 14 in order.

Start with the greatest.

,

,

**1** Colour the bird with the smaller number.

(a)





(b)



**2**

Colour the fruit with the greater number.

(a)






(b)




**3** Colour the burger with the greatest number.

(a)

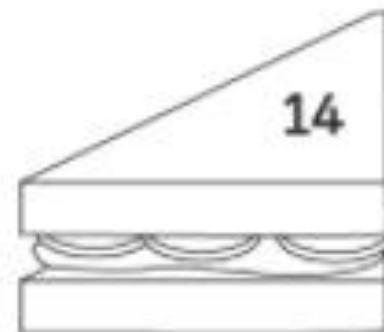
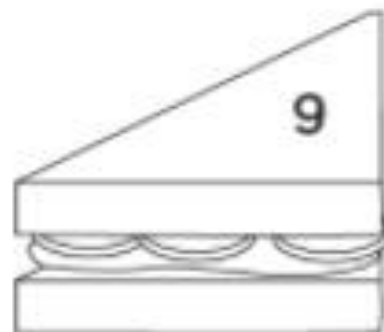
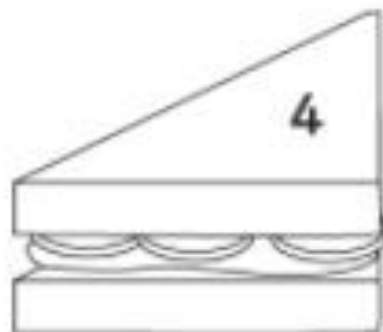


(b)

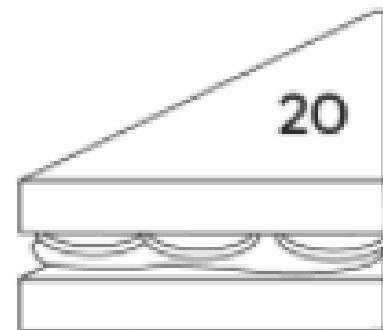
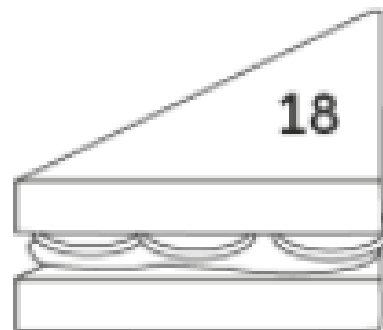
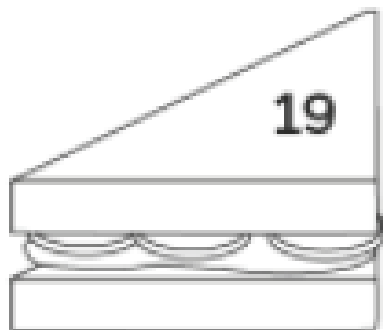


**4** Colour the sandwich with the smallest number.

(a)



(b)



- 5 Compare 18, 13 and 17.  
Write the missing numbers.

18

13

17

(a) The smallest number is .

(b) The greatest number is .

(c) Arrange the number in order.  
Start with the greatest.

, ,

6 Compare 3, 16 and 8.

Write the missing numbers.

3

16

8



(a) The smallest number is .

(b) The greatest number is .

(c) Arrange the numbers in order.  
Start with the smallest.

,  ,

- 7 Arrange the numbers in order.  
Start with the greatest.



- 8** Arrange the numbers in order.  
Start with the smallest.

