
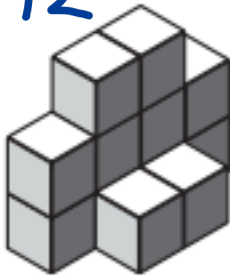


Volume of Irregular Shapes


What is the volume of each shape below?

 = 1 cubic unit

1. 12



2. 11



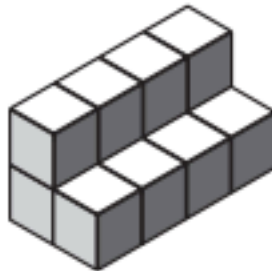
3. 5



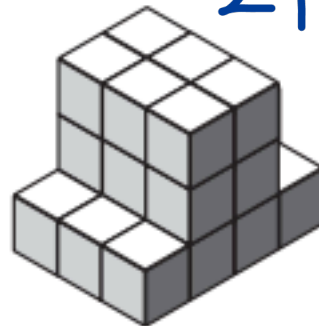
4. 44



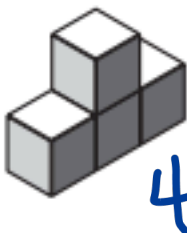
5. 12



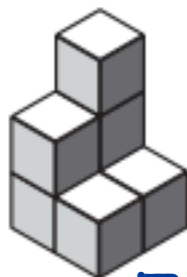
6. 24




7. 4



8. 7



9. 30



10. 13

