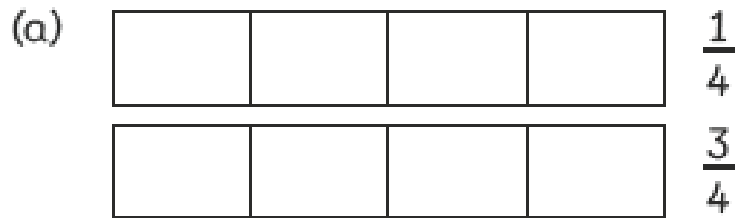
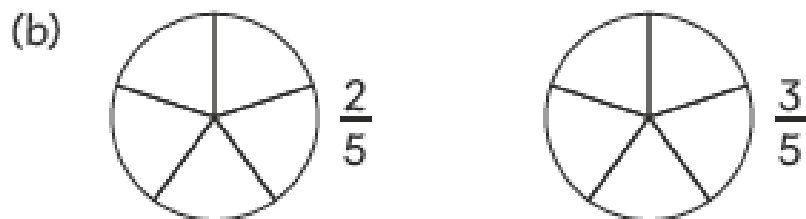


- 1** Colour the parts to show each fraction.
Fill in the blanks.



is greater than .

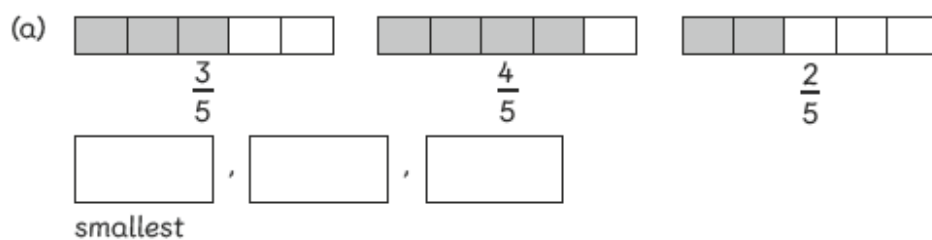
is smaller than .



is greater than .

is smaller than .

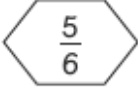
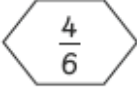
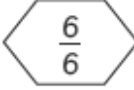


- 2** Arrange the fractions in order. Start with the smallest.



Challenge:

- 3** Arrange the fractions in order. Start with the greatest.

(a)

		
	, 	, 