

1. Lucy has 28 sweets and James has 15. How many more does Lucy have than James?




2. Anna buys a banana for 21p and an apple for 17p. How much does she spend all together?



She then buys a 15p sweet. How much has she spent now?

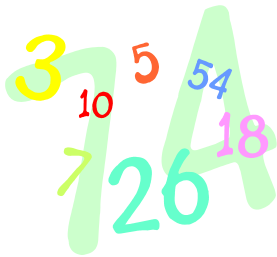
3. Jane is 16 years younger than Gary, who is 24. How old is Jane?




4. Polly has 16p less than Gary, who has 48p. How much does Polly have?



5. What is the total of 245 and 367?



6. My mum is 29 and my dad is 36. What is the total of their ages?



7. There are 38 people on the bus. At the next stop, 7 people get off. How many people are left on the bus?




8. Tanya has a ribbon that is 29cm long. She cut off 14cm. How long is her ribbon now?



She then cuts off another 6cm. How much is left?

9. Crisps cost 24p. How much would 4 packets cost?



How much change would Ali get from £1?

10. Chocolate bars cost 56p.



How much will it cost to buy 3 bars?