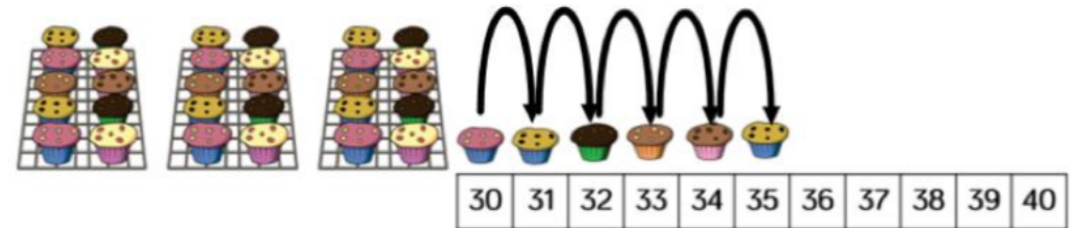


# Challenge 1

Annie counts how many muffins she has.



I have 35 muffins.




Do you agree with Annie?

Explain your answer.

# Challenge 2

Eva is counting from 38 to 24



Will she say the number 39?

Will she say the number 29?

Will she say the number 19?

Explain how you know.

# Challenge 3

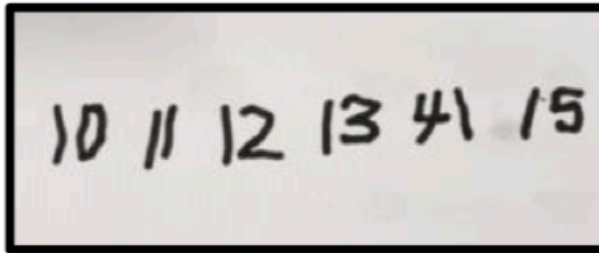
Ron and Whitney are counting.

Ron says:



43, 42, 41, 40, 41, 42

Whitney writes:



Can you spot their mistakes?